

Name: _____ Date: _____




Area

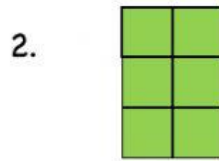
(length x width)




Find the area by counting the squares.



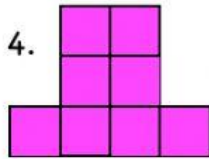
Area: _____



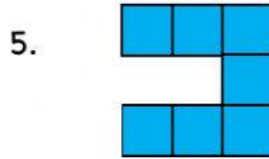
Area: _____




Area: _____



Area: _____

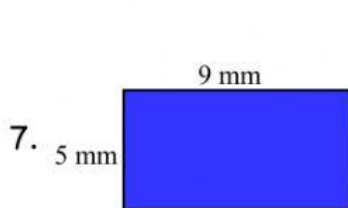


Area: _____

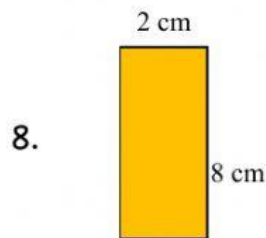


Area: _____

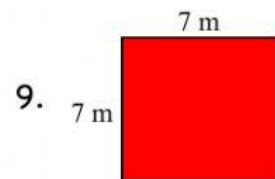
Find the area by multiplying the length x width.



Area: _____ mm²



Area: _____ cm²



Area: _____ m²