

DECIMALES

Las fracciones se puede expresar en forma de decimales observa y recuerda aplicar lo aprendido en clase.

Nombre y apellido:

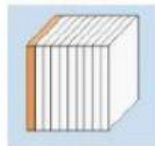
1 DÉCIMA



$$\frac{1}{10}$$



$$0.1$$



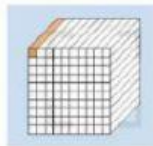
1 CENTÉSIMA



$$\frac{1}{100}$$



$$0.01$$



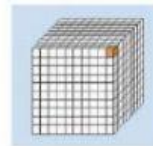
1 MILÉSIMA



$$\frac{1}{1000}$$



$$0.001$$



ESCRIBE EN FORMA DE DECIMAL:

$$\frac{7}{10} \rightarrow$$



$$\frac{5}{10} \rightarrow$$



$$\frac{27}{100} \rightarrow$$



$$\frac{93}{100} \rightarrow$$



$$\frac{2}{10} \rightarrow$$



$$\frac{9}{10} \rightarrow$$



$$\frac{52}{100} \rightarrow$$



$$\frac{271}{100} \rightarrow$$



$$\frac{566}{1000} \rightarrow$$



$$\frac{420}{100} \rightarrow$$



$$\frac{656}{10} \rightarrow$$



$$\frac{350}{1000} \rightarrow$$



Prof. Carmita Rosero

UEFSFQ