

Year 4 Maths-Term 3-Week 2-Lesson 3

Measurement-MASS

LO: To read scales marked in Kilograms and in grams

Challenge 1



_____ g



_____ kg



_____ kg



_____ g

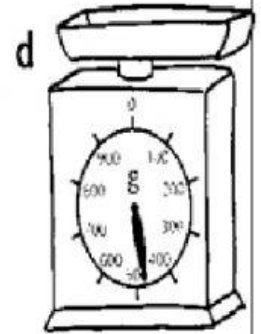
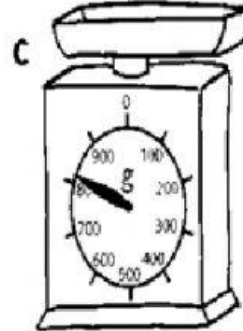
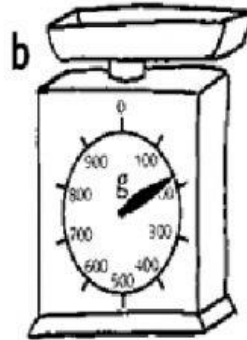
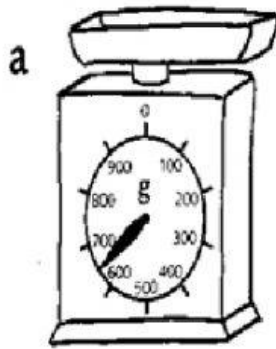


_____ kg

Challenge

2

1 Write the mass to the nearest 100 g, shown on each scale.



a.

b.

c.


d.


Challenge


3


Fish A has a mass of 750 g. Use the clues to find the mass in grams of these fish.

- a Fish B is 200 g lighter than Fish A.
- b Fish C is double the mass of Fish B.
- c Fish D is 350 g heavier than Fish C.



Fish A: 750 g 

Fish B: _____ g 

Fish C: _____ g 

Fish D: _____ g 