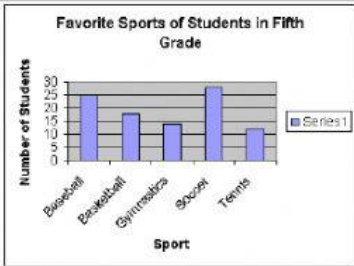
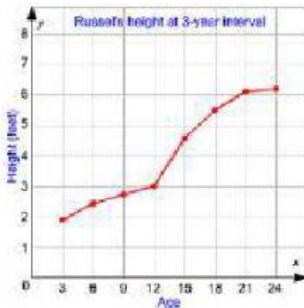



















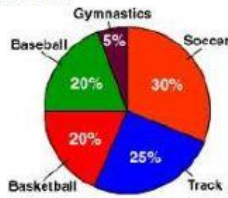
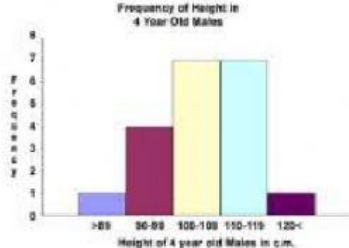


Directions: Fill in the blanks using the information from the chart.

Types of Graphs

Type of Graph	Example	When do I want to use this kind of graph?						
<p>A _____</p> <p>_____</p> <p>presents data so that comparisons of different items can be made</p>		<ul style="list-style-type: none">➤ Used to compare the _____ of data➤ Use a bar graph when you want to _____ 2 or more sets of data						
<p>A _____</p> <p>_____</p> <p>presents data on one item so that _____ and _____ trends</p> <p>_____ can be identified and comparisons can be made</p>		<ul style="list-style-type: none">➤ Use when you have _____ data➤ Use when you want to show _____ over _____						
<p>A _____</p> <p>_____</p> <p>presents data using pictures or symbols</p>	<p style="text-align: center;">Number of Trees Students Planted</p> <table border="1" style="margin-left: auto; margin-right: auto;"><tr><td>Third Grade</td><td> </td></tr><tr><td>Fourth Grade</td><td></td></tr><tr><td>Fifth Grade</td><td>   </td></tr></table> <p style="text-align: center;">Key:  = 2 Trees</p>	Third Grade	 	Fourth Grade		Fifth Grade	   	<ul style="list-style-type: none">➤ Each picture or symbol represents and assigned amount of _____➤ The _____ tells the number that each picture or symbol represents➤ Use when you have _____ amounts of data that is too big for a bar graph➤ Use when you only have _____ to _____ categories
Third Grade	 							
Fourth Grade								
Fifth Grade	   							
<p>A _____</p> <p>_____</p> <p>shows how _____ are related to the _____</p>	<p style="text-align: center;">Most popular sports at Cove Elementary School.</p> 	<ul style="list-style-type: none">➤ Use when you want to show how a _____ amount of data is _____ into parts➤ Can be used to show _____➤ Use when you have _____ to _____ categories						
<p>A _____</p> <p>_____</p> <p>is a bar graph that shows the frequency of equal _____ of data</p>	<p style="text-align: center;">Frequency of Height in 4 Year Old Males</p> 	<ul style="list-style-type: none">➤ Different than a bar graph because it uses _____ instead of individual numbers and the _____➤ The _____ must not _____➤ Good to use with _____ data (ex: weight, height, time, etc)						