


# Kendriya Vidyalaya Southern Command

**Class:II**

**Topic: Counting in Groups**

**Subject: Maths**


**Q1.Count in groups:**



Total numbers of strawberries:



Total numbers of dogs:




Total numbers of Cats:




Total numbers of pencils:

Total numbers of boys:

**Q2. Divide shapes in group and count:**

**(A). Divide  in groups of 2 and count:**



How many groups? =

Total numbers of  =

**(B). Divide  in groups of 4 and count:**



How many groups of  :

Total numbers of  :