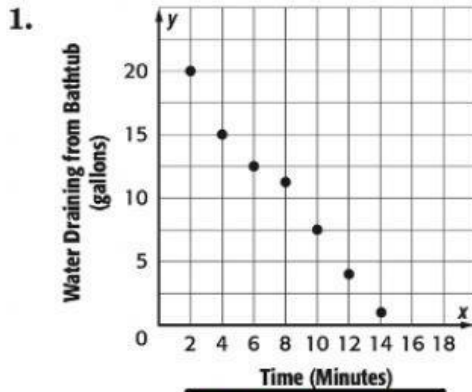


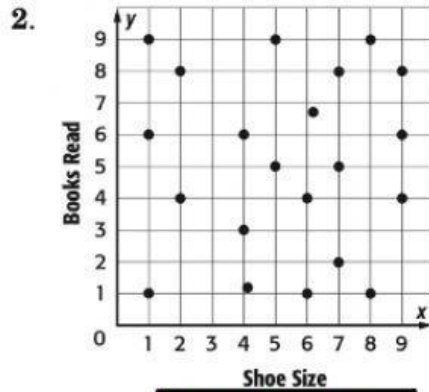
Lesson 1 Skills Practice

Scatter Plots

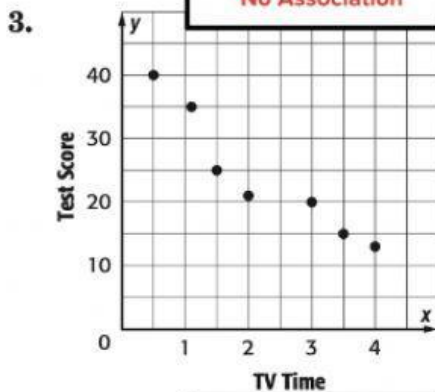
Explain whether the scatter plot of the data for each of the following shows a *positive*, *negative*, or *no* association. Interpret the scatter plot.



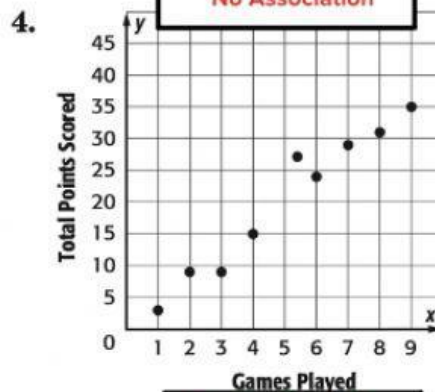
- Time (Minutes)
- Positive Association
 - Negative Association
 - No Association



- Shoe Size
- Positive Association
 - Negative Association
 - No Association



- TV Time
- Positive Association
 - Negative Association
 - No Association



- Games Played
- Positive Association
 - Negative Association
 - No Association