


















Pictograph

Use the pictograph to answer the questions below:

The airlines made the amounts of flight to the Family Islands in one week.

AIRLINES	NUMBER OF FLIGHTS
Southwest Airlines	    
Bahamas Air	 
Flamingo Air	     
American Eagle	   

KEY: each  = 10 flights

- Which airline made the most flight to the Family Islands? _____
- Which airline made the least flight to the Family Islands? _____
- How many more flight did Southwest Airlines made than Bahamas Air _____
- Which is the combine flight of American Eagle and Sourthwest Airlines? _____
- What is the total number of flight that went to the Family Islands this week/ _____