

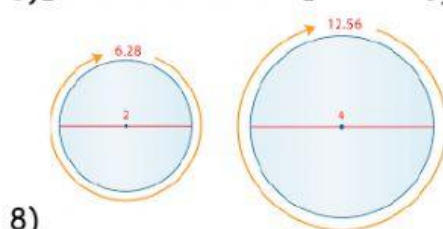
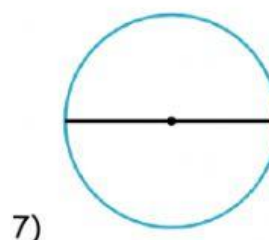
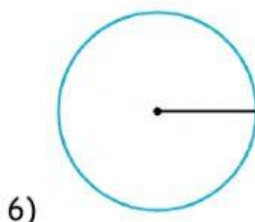
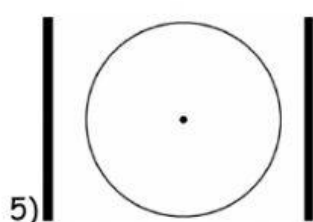
Name _____ Date _____

Circle Talk

Match the names to the descriptions of the circle parts by typing the correct letter in the box.

1) radius	a) the measurement all the way around a circle
2) diameter	b) a line half-way across a circle from its center point
3) circumference	c) a line all the way across a circle through its center point
4) center point	d) a point in the center of a circle

Type in radius, diameter, center point, or circumference to identify the parts of a circle.



Choose the correct words to fill in the blanks: center point circle A

9) A circle is named for its _____.

10) The name of this circle is _____.

