









How much Money do you need to buy these things? Circle the notes and coins you need.


The English School -Grade 3-


	
	
	
	







The English School -Grade 3-



 <p>Banknotes: 100€ (2), 10€ (1), 5€ (1), 20€ (4), 1€ (1), 5€ (1), 10€ (1). Coins: 1€ (2), 2€ (2), 5€ (1), 10€ (1), 20€ (4), 50€ (1).</p>	 <p>207,75€</p>
 <p>Banknotes: 20€ (2), 5€ (2). Coins: 1€ (2), 2€ (2), 5€ (1), 10€ (1), 20€ (1).</p>	 <p>11.25</p>
 <p>Banknotes: 100€ (2), 10€ (1), 5€ (1), 20€ (1), 1€ (1), 5€ (1), 10€ (1). Coins: 1€ (2), 2€ (2), 5€ (1), 10€ (1), 20€ (1), 50€ (1).</p>	 <p>209.15</p>