


# Paying and Giving Change

I can work out the total amount of change I will receive when paying for an item.

**You have 50 AED.**

You buy the following items. Work out how much change you will receive. Show your working out as a number sentence.

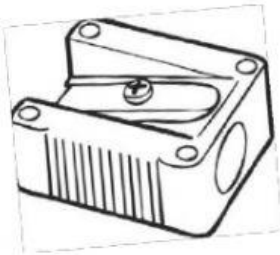
45 AED



Change =

---

35 AED



Change =

---

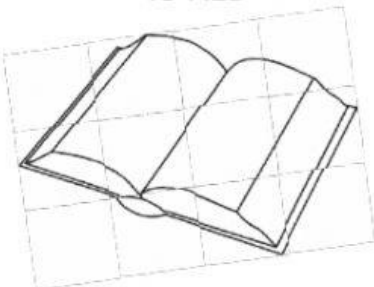
15 AED



Change =

---

40 AED



Change =

---

45 AED



Change =

---


35 AED



Change =

---

15 AED



Change =

---

**Added Challenge:**

You buy an envelope and a sharpener.

How much change will you receive?

---