


Problem Solving with Money



5 AED



10 AED



20 AED



16 AED



12 AED




7 AED



10 AED




9 AED




15 AED



12 AED



8 AED



12 AED



25 AED

Problem Solving with Money

Solve the money problems below. Show your working out.

1. Salem bought bread, milk and tomatoes. How much money did he spend?

2. Sara bought chicken, orange juice and bananas. How much did she spend?

3. Nawaf bought apples, and bananas. How much did he spend?

4. Mahir bought 3 cupcakes and some orange juice. How much did he spend?

5. Reem bought three bunches of bananas, and a bunch of grapes. How much did she spend?

6. How many cupcakes can Muhammad buy with a 100 AED note? Show your working out.

7. Fauzea bought 3 bags of apples, and one bunch of grapes. How much **more** did she pay for the grapes than the apples?

Challenge:

8. Shaika went to the shop and bought 3 items. She spend 28 AED. What 2 items might she have bought?
