


Problem Solving with Money



5 AED



10 AED



20 AED



16 AED



12 AED




7 AED



10 AED




9 AED




15 AED



12 AED



8 AED



12 AED



25 AED

Problem Solving with Money

Solve the money problems below. Show your working out.

1. Salem bought bread and milk. How much money did he spend?

2. Sara bought chicken and orange juice. How much did she spend?

3. Nawaf bought apples and bananas. How much did he spend?

4. Mahir bought 3 cupcakes. How much did he spend?

5. Reem bought orange juice, bread and apples. How much did she spend?
