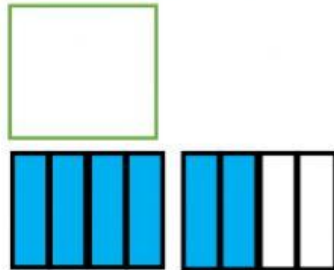


Matemáticas

Las fracciones

Elige la fracción para cada gráfico

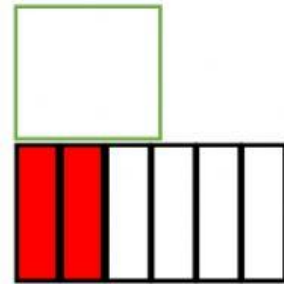
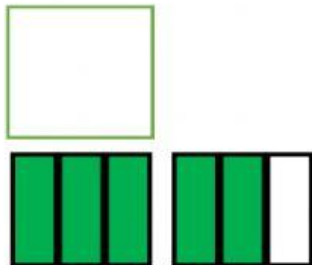
$$\frac{5}{3}$$



$$\frac{2}{6}$$

$$\frac{6}{4}$$

$$\frac{4}{8}$$

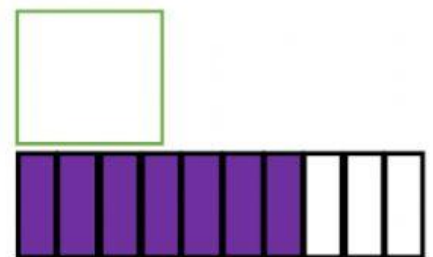
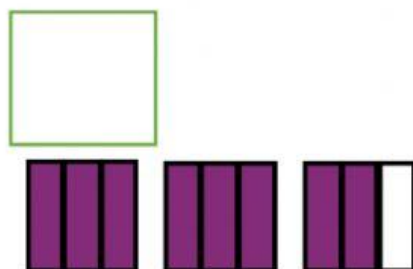
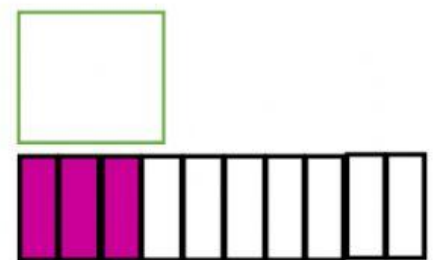
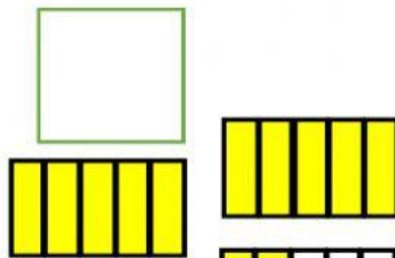


$$\frac{7}{10}$$

$$\frac{8}{3}$$

$$\frac{3}{10}$$

$$\frac{12}{5}$$



Escribe **P** si la fracción es propia **I** si es impropia.

$\frac{1}{3}$

$\frac{12}{6}$

$\frac{8}{10}$

$\frac{13}{5}$

$\frac{3}{8}$

$\frac{8}{2}$

Une la fracción en como se lee.

$\frac{5}{3}$

• Doce octavos

$\frac{2}{6}$

• Cinco tercios

$\frac{3}{4}$

• Dos sextos

$\frac{12}{8}$

• Tres cuartos