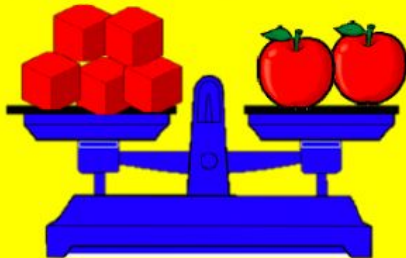


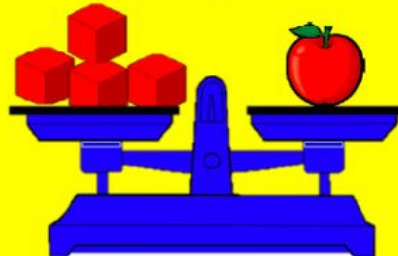
WEIGHT BALANCING

Q.1:-Count the cubes and write the weight:-

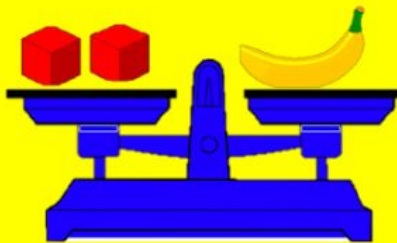
[1] 2 apples weigh..... cubes



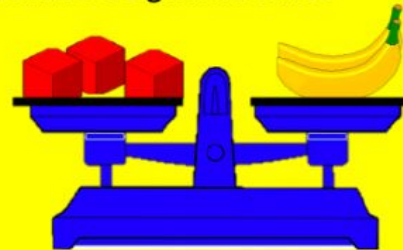
1 apple weighs..... cubes



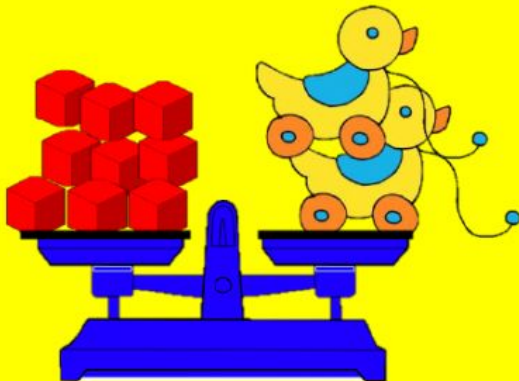
[2] 1 banana weigh..... cubes



2 banana weigh..... cubes



[3] 2 Toy duck weighs..... cubes



1 Toy duck weighs..... cubes

