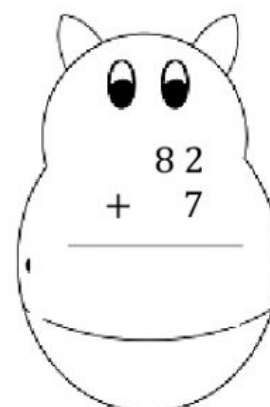
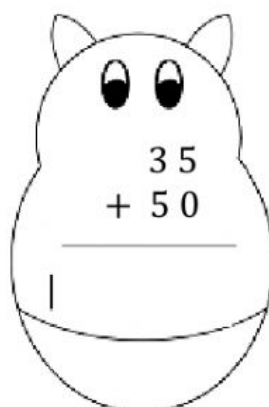
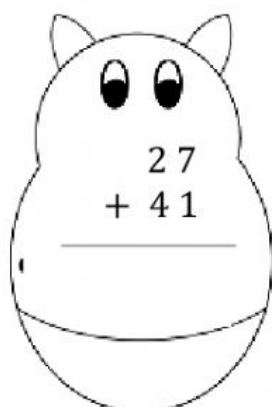


Họ và tên: _____

Lớp: _____ Ngày: ____ / ____

Phiếu số 1- Practice Addition within 100 no regrouping

1. Add.



Write the **addition sentence**. Find the **sum**.

2. $23 + 34 = \underline{\hspace{2cm}}$

3. $54 + 5 = \underline{\hspace{2cm}}$

4. $6 + 31 = \underline{\hspace{2cm}}$

	Tens	Ones
+		

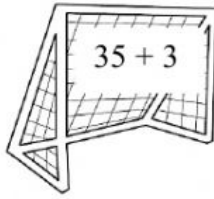
	Tens	Ones
+		

	Tens	Ones
+		

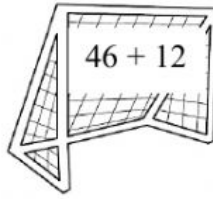


Match.

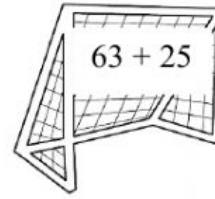
5.



6.



7.



8. Write the **number sentence**.

John makes 63 toys.

Then he makes 4 more toys.

How many toys does he make in all?

___ ○ ___ = ___

John makes ___ toys in all.

	Tens	Ones
+		

9. Write the **missing numbers**.

