

Math Quiz- Week 1

What is double 8?

.....

Write the next three numbers:

28, 38, 48, _____, _____, _____

.....

Write the next three numbers:

5, 10, 15, _____, _____, _____

.....

$27 - 9 =$ _____

What is double 6? _____

What is half of 14? _____

.....

What is half of 8? _____

.....

What is double 9? _____

$$23 - 7 = \underline{\hspace{2cm}}$$

Put these numbers in order from smallest to biggest:

54, 67, 21, 94, 2, 51

Put these numbers in order from biggest to smallest:

36, 92, 38, 23, 74

$$16 + 5 = \underline{\hspace{2cm}}$$

1. $18 + 23 = \underline{\hspace{2cm}}$

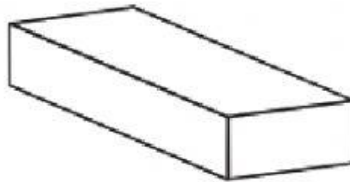
7. Emily, Jake and Jack are triplets. Mum buys Jake a new pack of pencils for school. Inside the pack, there are 6 pencils. She decides to buy Emily and Jack the same number of pencils. How many pencils has mum bought altogether?

.....

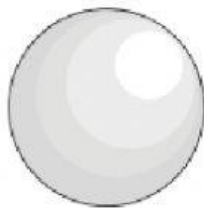
8. Name a 3D shape that has 6 faces, all the same shape and size.

.....

1. Name this shape:



Name this shape:



.. Which month comes after April?

.....

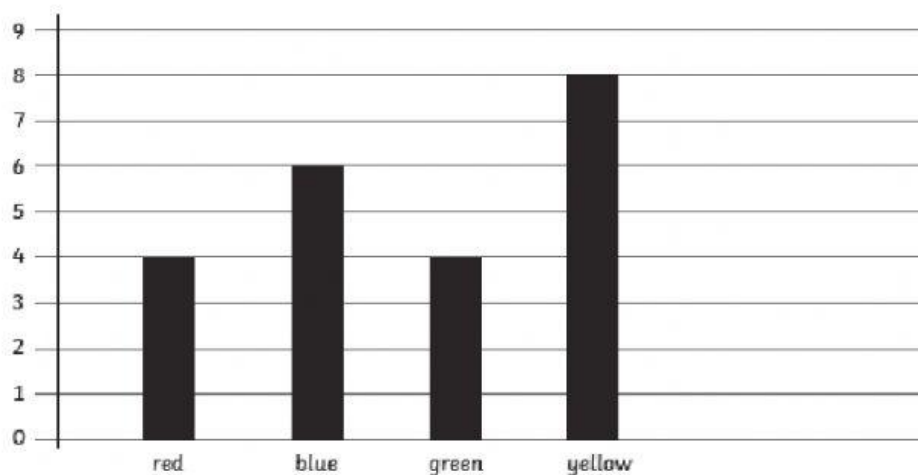
.. How many days are in a year?

.....

.. If I start an activity at half past 8 and finish it at ten o'clock,
how long has it taken me?

.....

Read the graph below and then answer the questions.



The children in the school have been told that they will be getting a new school uniform this year. They are allowed to choose a new colour for their shirts. Class 1 conducted a survey and got these results.

- Which colour has been most popular? _____
- Which colour has been least popular? _____
- What is the difference between the highest and the lowest numbers? _____