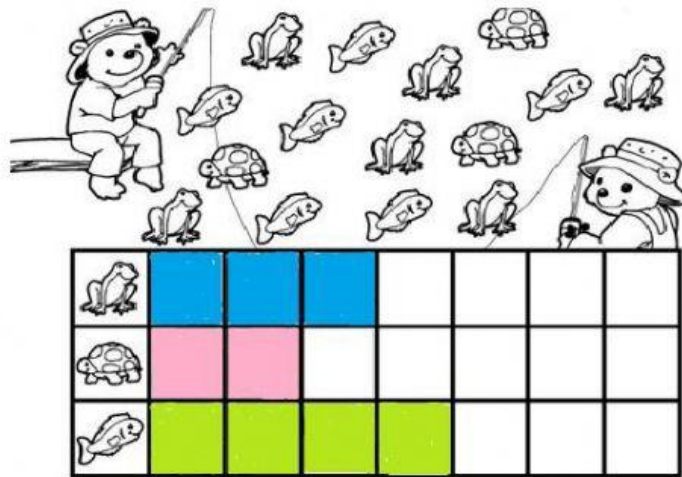


Math 2nd Grade

2nd Test



 Write.

1. Answer the questions about the bar graph.


a. How many frogs are at the pond?

b. How many turtles are at the pond?


c. How many fish are at the pond?

d. How many animals are there in all?

2. Write the temperatures.



°F



°F



Dime

10 ¢



ten dollar bill

10 \$

3. How many cents?



¢

¢

¢

¢

¢

4. How many dollars?



\$

\$

\$

5. Write the > or < sign.

84

86

160

170

25

11

6. Write the numbers in order.

150

200

160

Least

between

greatest

7. Addition and subtraction find the answer.

$$3 + 8 = \boxed{} \quad 9 - 6 = \boxed{} \quad 3 + 3 = \boxed{}$$

$$\begin{array}{r} 5 \\ - 2 \\ \hline \end{array} \quad \begin{array}{r} 9 \\ + 1 \\ \hline \end{array} \quad \begin{array}{r} 4 \\ + 4 \\ \hline \end{array} \quad \begin{array}{r} 2 \\ + 3 \\ \hline \end{array} \quad \begin{array}{r} 8 \\ - 3 \\ \hline \end{array}$$