



Name: \_\_\_\_\_

Date: \_\_\_\_\_



Class: KG3

Subject: Math



**On Level: Group B**

**Learning Expectation: Count objects in two groups**

Count and write the sum



$$\boxed{\phantom{00}} + \boxed{\phantom{00}} = \boxed{\phantom{00}}$$



$$\boxed{\phantom{00}} + \boxed{\phantom{00}} = \boxed{\phantom{00}}$$