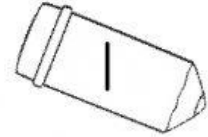


Name: _____

Date: _____ # _____



1 Find the sum:

$$\begin{array}{r} 2,193 \\ + 3,622 \\ \hline \end{array}$$

2 Find the difference:


$$\begin{array}{r} 4,728 \\ - 691 \\ \hline \end{array}$$

3 Find the product:

$$\begin{array}{r} 7,526 \\ \times 5 \\ \hline \end{array}$$

4 Find the quotient:

$$370 \div 5 =$$



5

6 groups of \square is the same as 48.

6

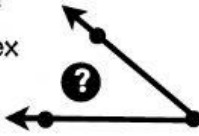
Round to the nearest hundred.

59,450

7

What is the space between two intersecting lines called?

- (A) vertex
- (B) angle
- (C) ray


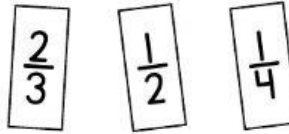


8

The students were asked to read during the summer. The total number of books read was 2,434. If 1,822 were fiction and the rest were nonfiction, how many nonfiction books were read?

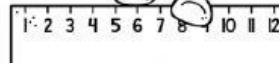
9

Put the fractions in order from least to greatest.



10

The classroom door is 7 and a half feet tall. How many inches tall is it?



#	answer
1	
2	
3	
4	
5	
6	
7	
8	
9	
10	