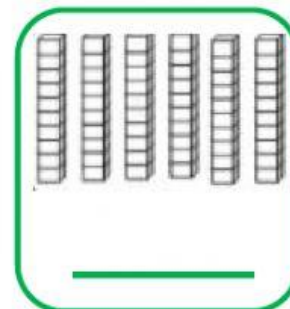
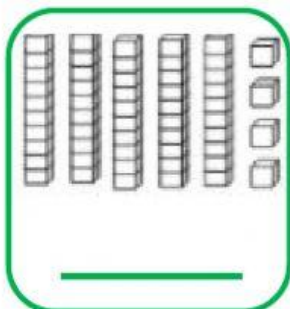


Guía Evaluada n°1

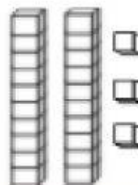
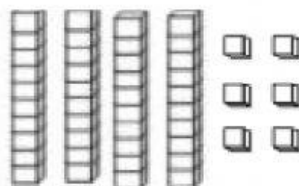

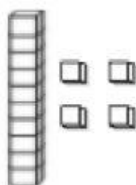
“Unidad 0: Recordamos y repasamos”

Matemáticas – 2° Básico

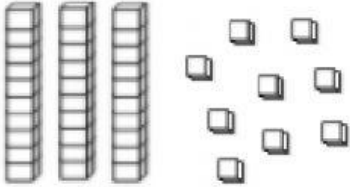
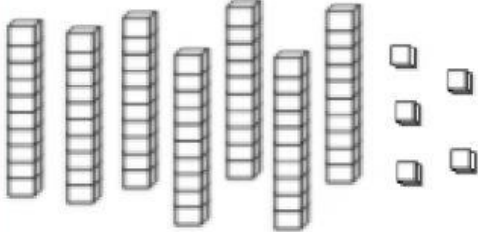
1. Escribe el número que está representado con unidades y decenas.



2. Arrastra la cantidad de unidades y decenas necesarias para representar cada número.



3. Escribe el número que está representado con unidades
4. y decenas.

	<div style="display: flex; justify-content: space-around; align-items: center;"> <div style="border: 1px solid black; width: 40px; height: 40px; display: flex; align-items: center; justify-content: center;"> <div style="border: 1px solid black; width: 20px; height: 20px; display: flex; align-items: center; justify-content: center;">D</div> </div> <div style="font-size: 24px;">+</div> <div style="border: 1px solid black; width: 40px; height: 40px; display: flex; align-items: center; justify-content: center;"> <div style="border: 1px solid black; width: 20px; height: 20px; display: flex; align-items: center; justify-content: center;">U</div> </div> </div> <div style="display: flex; justify-content: space-around; align-items: center; margin-top: 10px;"> <div style="border: 1px solid black; width: 40px; height: 40px; display: flex; align-items: center; justify-content: center;"></div> <div style="font-size: 24px;">+</div> <div style="border: 1px solid black; width: 40px; height: 40px; display: flex; align-items: center; justify-content: center;"></div> <div style="font-size: 24px;">=</div> <div style="border: 1px solid black; width: 40px; height: 40px; display: flex; align-items: center; justify-content: center;"></div> </div>
	<div style="display: flex; justify-content: space-around; align-items: center;"> <div style="border: 1px solid black; width: 40px; height: 40px; display: flex; align-items: center; justify-content: center;"> <div style="border: 1px solid black; width: 20px; height: 20px; display: flex; align-items: center; justify-content: center;">D</div> </div> <div style="font-size: 24px;">+</div> <div style="border: 1px solid black; width: 40px; height: 40px; display: flex; align-items: center; justify-content: center;"> <div style="border: 1px solid black; width: 20px; height: 20px; display: flex; align-items: center; justify-content: center;">U</div> </div> </div> <div style="display: flex; justify-content: space-around; align-items: center; margin-top: 10px;"> <div style="border: 1px solid black; width: 40px; height: 40px; display: flex; align-items: center; justify-content: center;"></div> <div style="font-size: 24px;">+</div> <div style="border: 1px solid black; width: 40px; height: 40px; display: flex; align-items: center; justify-content: center;"></div> <div style="font-size: 24px;">=</div> <div style="border: 1px solid black; width: 40px; height: 40px; display: flex; align-items: center; justify-content: center;"></div> </div>

5. Resuelve las siguientes adiciones.

$80 + 10 = \text{○}$	$40 + 6 = \text{○}$	$9 + 71 = \text{○}$
$75 + 5 = \text{○}$	$30 + 20 = \text{○}$	$52 + 10 = \text{○}$

6. Completa la siguiente adición.

<div style="border: 1px solid black; width: 60px; height: 40px; display: flex; align-items: center; justify-content: center; margin: 0 auto 10px auto;"> <div style="border: 1px solid black; width: 20px; height: 20px; display: flex; align-items: center; justify-content: center;"> </div> </div> $+ 10 = 18$	$64 + \text{○} = 70$
---	----------------------

