


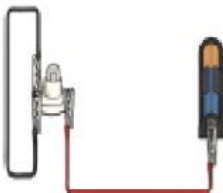


Science Worksheet

Name:	Year: 4 Section:	Date:
-------	---------------------	-------

WALT: Construct a simple series electrical circuit, identifying and naming its basic parts, including cells, wire, bulbs, switches and buzzers.

Look at the following circuits carefully. Predict if they are complete (bulb will light) or incomplete (bulb will not light). After you have done this, create the circuits to test if your predictions are correct.

Circuit	Prediction (Complete or incomplete?)	CORRECT ANSWER
		
		
		
		

How many did you predict correctly? _____

What is the difference between the complete and incomplete circuits?