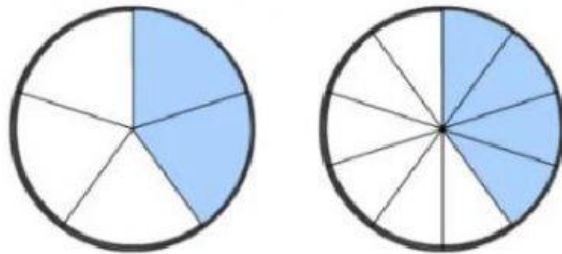


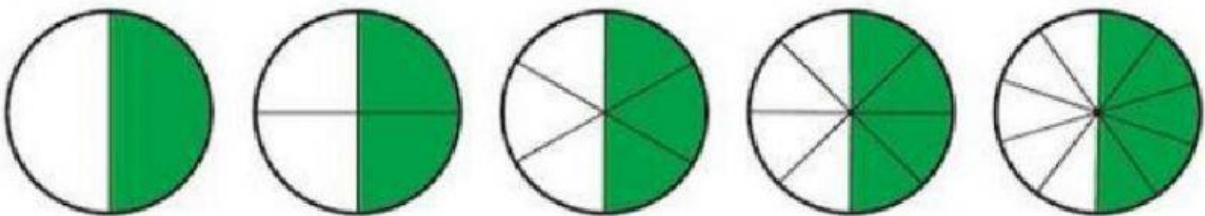
FRACCIONES EQUIVALENTES

Las fracciones equivalentes son aquellas que representan la misma cantidad.

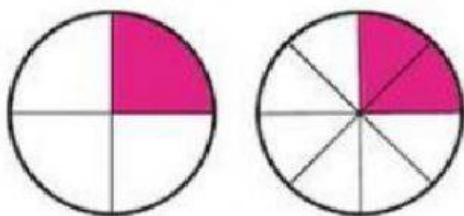


$$\frac{2}{5} = \frac{4}{10}$$

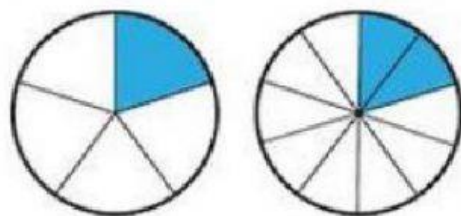
1. Mira atentamente y completa las siguientes fracciones equivalentes según corresponda.



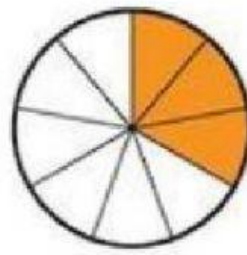
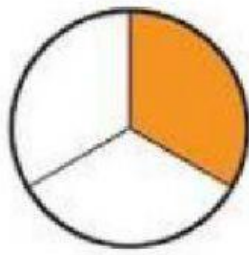
$$\frac{1}{2} = \frac{2}{4} = \frac{3}{6} = \frac{4}{8} = \frac{5}{10}$$



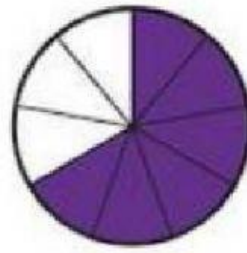
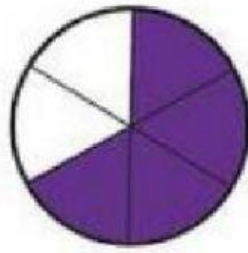
$$\frac{1}{4} = \frac{2}{8}$$



$$\frac{2}{5} = \frac{4}{10}$$



_____ = _____ = _____



_____ = _____ = _____