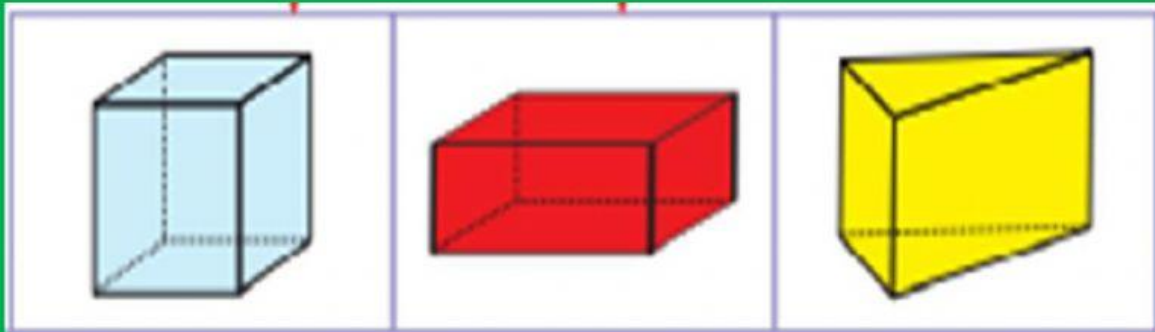


Student's Name: _____

Grade and Section: _____

Score: 10%

1. Instruction: Join each line with the correct name.



**Square
prism**

**Rectangle
prism**

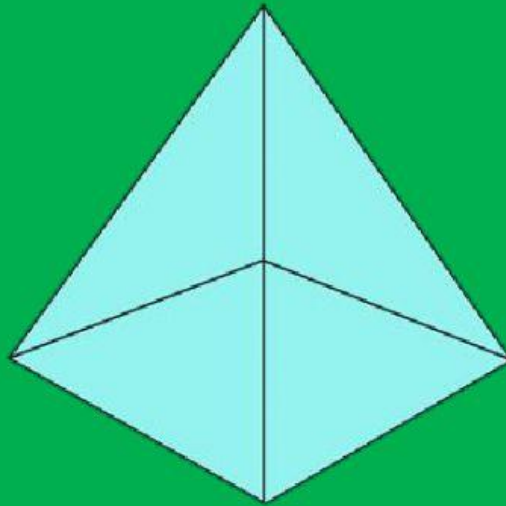
**Triangular
prism**

2. Instruction: Write the name of each one.



3. Instruction: Select the correct answer.

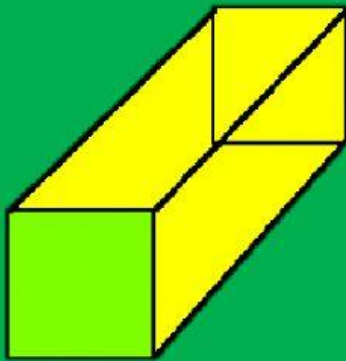
What is the name of each image?



pyramid

prims

table



prims

triangle

rectangular