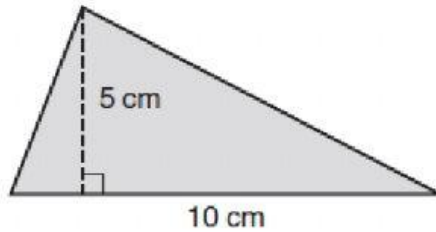




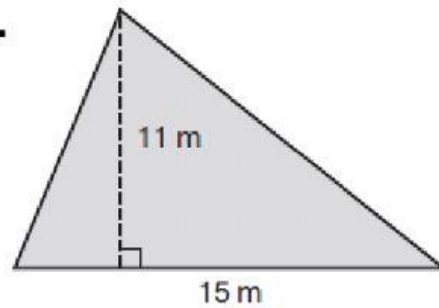
Find the area of each triangle.

1.



cm^2

2.



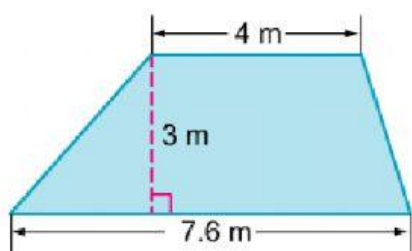
m^2



3. A triangular sail is 40 feet tall and 25 feet long. What is the area of the sail?

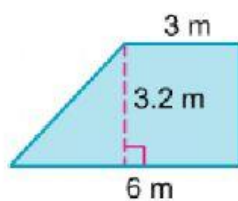
ft^2

Find the area of the trapezoid.



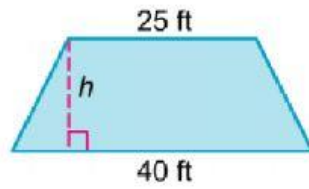
m^2

Find the area of the trapezoid.



m^2

The trapezoid has an area of 487.5 square feet. Find the height.



ft