



Name: _____

Domino Addition Up to 10


INSTRUCTIONS: Count and write how many dots are on each half of the domino. Next, add the numbers together to discover the total number of dots on each domino.




$$\underline{\quad\quad} + \underline{\quad\quad} = \boxed{\quad\quad}$$




$$\underline{\quad\quad} + \underline{\quad\quad} = \boxed{\quad\quad}$$




$$\underline{\quad\quad} + \underline{\quad\quad} = \boxed{\quad\quad}$$



$$\underline{\quad\quad} + \underline{\quad\quad} = \boxed{\quad\quad}$$



$$\underline{\quad\quad} + \underline{\quad\quad} = \boxed{\quad\quad}$$



$$\underline{\quad\quad} + \underline{\quad\quad} = \boxed{\quad\quad}$$