


Measuring capacity

1) Is the container measured in liter or milliliter



Liter

Milliliter

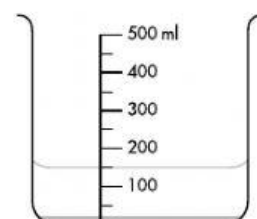
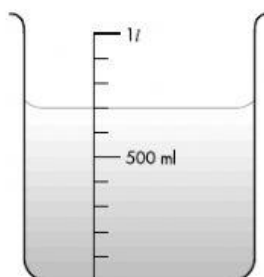


Liter

Milliliter

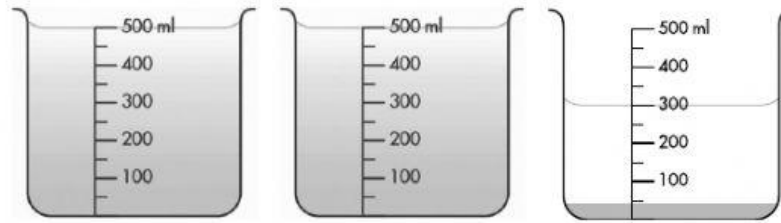
2) What is the total volume of water

(A)



_____ L _____ ml

(B)



_____ ml

3) What are the missing numbers

$$4\text{L} = \boxed{} \text{ ml}$$

$$3\text{L } 60\text{ml} = \boxed{} \text{ ml}$$

$$1635 \text{ ml} = \boxed{} \text{ L } \boxed{} \text{ ml}$$

$$7005 \text{ ml} = \boxed{} \text{ L } \boxed{} \text{ ml}$$