













1. What's the word? Write the word under the picture.

pizza	five o'clock	quarter past five	half past five	quarter to six	five past six
twenty past six	twenty-five past six	twenty-five to seven	twenty to seven	ten to seven	five to seven

					
	pizza				
					

2. Fill in the blanks.

Watch the video. Write the missing words in the sentences.

o'clock	time	quarter past	hours	minutes	fives	quarter to	half past
---------	------	--------------	-------	---------	-------	------------	-----------

- Emily is learning how to tell the time.
- The little hand shows us the \_\_\_\_\_.
- The big hand shows us the \_\_\_\_\_.
- When the big hand is pointing to the twelve, we say it's \_\_\_\_\_.
- When the big hand is pointing to the three, we say it's \_\_\_\_\_.
- When the big hand is pointing to the six, we say it's \_\_\_\_\_.
- When the big hand is pointing to the nine, we say it's \_\_\_\_\_.
- For other times, we count the minutes in \_\_\_\_\_.

### 3-What's the order?

Watch the video. Put the sentences in the correct order.

	It's quarter past five.
	It's twenty past six.
1	It's five o'clock.
	It's ten to seven.
	It's twenty-five to seven.
	It's quarter to six.
	It's five past six.
	It's half past five.