





Create/Solve Equation with One Variable
Assessment
Point/Check your answer.

A + B = C				
Mary Beth and Danielle are planting tiger lilies at the flower shop.				
A		Mary Beth plants 3 tiger lilies.		
B		Danielle plants 2 tiger lilies.		
C		How many tiger lilies do they plant altogether?		
Write the equation:				
A		B	=	C

1. To create the equation what number is A?

A=3

A=2

A=5

2. To create the equation what number is B?

B=3

B=2

B=5

3. To solve the equation what is the answer for C?

C=3

C=2

C=5