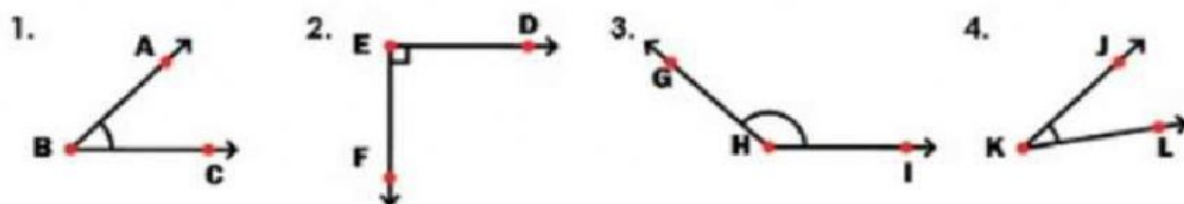


NAME: _____

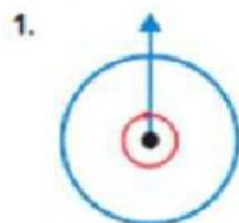
Label each angle as acute, obtuse, or right.



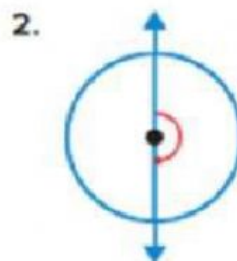
Classify each angle as *right*, *acute*, or *obtuse*.



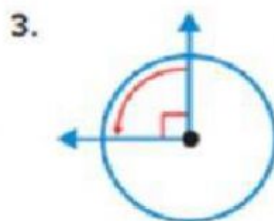
Write the measure of each angle in degrees and as a fraction of a full turn.



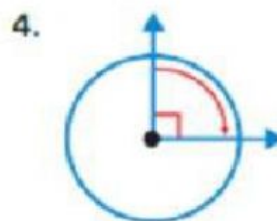
_____°, _____ turn



_____°, _____ turn



_____°, _____ turn



_____°, _____ turn