






Name -

Class :-III Subject:- Maths

2. Maneesh has put pictures of many animals in his room.
The table given below tell you the number of pictures of each animal.

Animal	Pictures of animals
Lion	
Monkey	
Deer	
Tiger	
Dog	

- (A) Pictures of which animals are more in the table? Lion Deer
- (B) How many pictures are there in the table? 19 20
- (C) The pictures of which animal is more in number- lion or deer? Lion Deer
- (D) The pictures of which animals are equal in number? Monkey-Dog Monkey-Tiger
- (E) The pictures of which animal is the least in number? Monkey Dog

పిల్లలూ.. 10/10 వచ్చాక మీ నోట్ బుక్ లో రాసుకోండి.

Designed by MAHESH MACHARLA.SGT.MPPS KOTHAPET O/C. JAGTIAL.