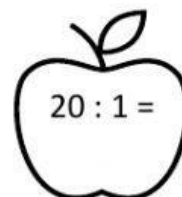
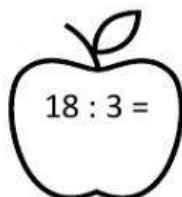
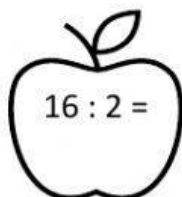
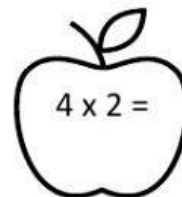
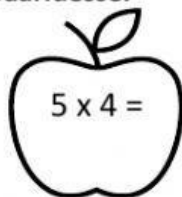
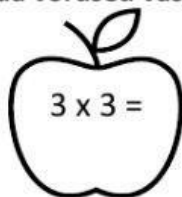
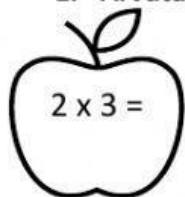


KORRUTAMINE JA JAGAMINE

2. klass

1. Arvuta. Ühenda võrdsed vastused paaridesse.



2. Lahenda pildi põhjal ülesanne.

Siiri



Helen



Kuido



Paul



Aare



12-aastane

.....-aastane

.....-aastane

.....-aastane

.....-aastane

↑
3 korda
vanem

↑
2 korda
noorem

↑
3 korda
noorem

↑
2 korda
vanem

3. Annil oli 10 eurot. Ta ostis kolm kahe-eurost jäätist. Palju jäi tüdrukul raha alles?

Tehe:

Vastus:

4. Leia laste vanused

