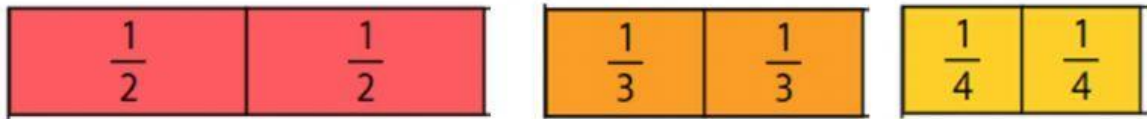


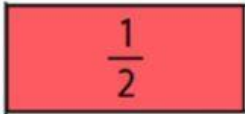
Equivalent fractions.

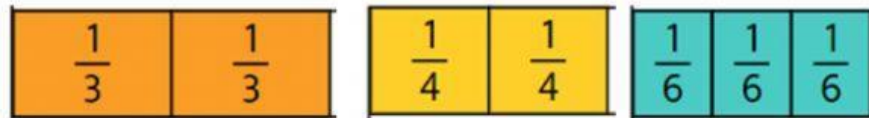
Use the interactive fraction strips at


<https://toytheater.com/fraction-strips/> to complete these questions.

Question 1.  is equal to



Question 2.  is equal to



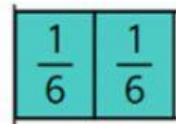
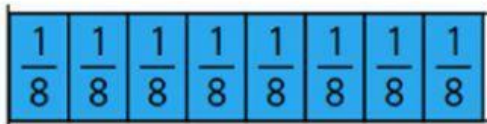
Question 3.  is equal to




Question 4.



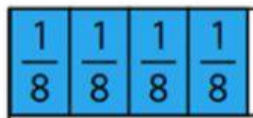
is equal to



Question 5.



is equal to



Question 6.

$\frac{1}{2}$ is equal to

$\frac{2}{4}$

$\frac{3}{6}$

$\frac{4}{3}$

Question 7.

1 is equal to

$\frac{5}{5}$

$\frac{1}{2}$

$\frac{2}{4}$

Question 8.

$\frac{1}{4}$ is equal to

$\frac{2}{6}$

$\frac{1}{2}$

$\frac{2}{8}$

Question 9.

1 is equal to $\frac{6}{3}$ $\frac{4}{4}$ $\frac{5}{6}$

Question 10.

$\frac{1}{2}$ is equal to $\frac{4}{8}$ $\frac{3}{3}$ $\frac{4}{8}$