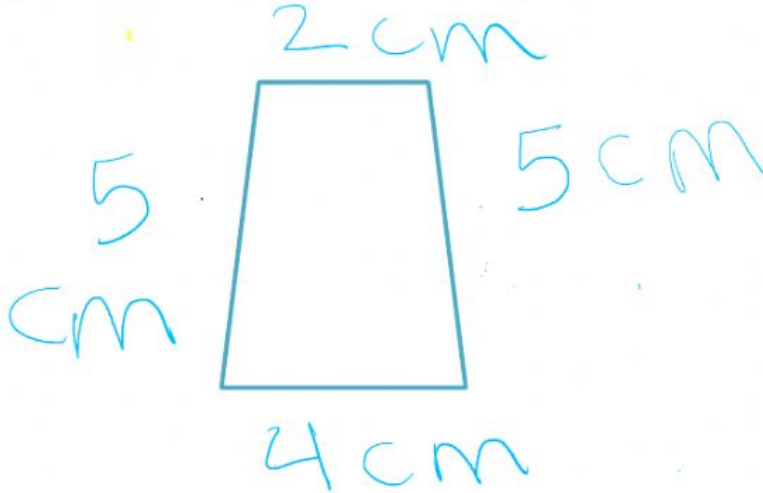


Name: .....  
School: .....  
Cl **Grade 3 week 22**  
Subject: **Math** Title: **Perimeter**



Worksheet

1) a) Calculate the perimeter of the figure:-





Perimeter = --- +-----+-----+ ----- = ----

b) Measure the sides of the figure then complete with the appropriate number:-



Perimeter = --- +-----+-----+ ----- = ----

1) Select  if the red point is the midpoint of the segment:



1) Drag to the midpoint of the segment , mark in red:

