

1

Choose **two vertebrate animals** (from different vertebrate groups) and explain how you know that it is from that group talking about its physical characteristics (reproduction, breathing, special features, etc.).

Animal 1

Animal 2

2

Choose **one invertebrate animal** and explain how you know that it is from that group talking about its physical characteristics (reproduction, breathing, special features, etc.).

3

Match with the correct group.

They have a moist skin.



They have scales and fins.



They have a dry skin and scales.



They have shell.



They have fur.



They have a spiny skin.



They have exoskeleton.



They have feathers.



Mammals



Arthropods



Birds



Amphibians



Fish



Echinoderms




Reptiles



Molluscs

4

Look at these pictures and select the correct answers.



Elephant

Classification:

Group:

Breathing:

Reproduction:

Body:



Scorpion

Classification:

Group:

Breathing:

Reproduction:

Body:



Jellyfish


Classification:

Group:

Breathing:

Reproduction:

Body:



Crocodile


Classification:

Group:

Breathing:

Reproduction:

Body:



Starfish

Classification:

Group:

Breathing:

Body:



Clam

Classification:

Group:

Breathing:

Reproduction:

Body:



Ladybug

Classification:

Group:

Breathing:

Reproduction:

Body:



Octopus

Classification:

Group:

Breathing:

Reproduction:

Body:



Snake

Classification:

Group:

Breathing:

Reproduction:

Body:



Frog


Classification:

Group:

Breathing:

Reproduction:

Body:



Penguin

Classification:

Group:

Breathing:

Reproduction:

Body:



Clown fish


Classification:

Group:

Breathing:

Reproduction:

Body:



Dolphin

Classification:

Group:

Breathing:

Reproduction:



Millipede

Classification:

Group:

Breathing:

Reproduction:

Body:



Worm

Classification:

Group:

Breathing:

Reproduction:

Body:



Snail

Classification:

Group:

Breathing:

Reproduction:

Body:



5 Choose the correct option about the animal nutrition and reproduction.

They only eat plants.

Herbivore

Carnivore

Omnivore

Scavenger

They born from their mother's womb.

Oviparous

Viviparous

Ovoviviparous

Monotreme

They eat plants and meat.

Herbivore

Carnivore

Omnivore

Scavenger

They eat carrion.

Herbivore

Carnivore

Omnivore

Scavenger

They only eat meat.

Herbivore

Carnivore

Omnivore

Scavenger

They born from eggs.

Oviparous

Viviparous

Ovoviviparous

Monotreme

They born from eggs but inside they mother's.

Oviparous

Viviparous

Ovoviviparous

Monotreme

They are mammals but born from eggs.

Oviparous

Viviparous

Ovoviviparous

Monotreme

6 Label the different parts of these arthropods.

Thorax

Antennae

Cephalothorax

6 legs

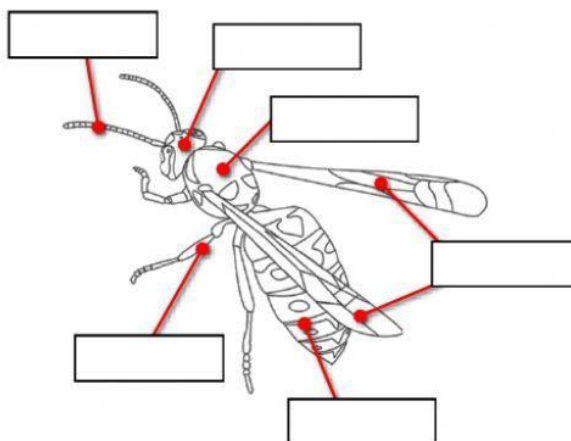
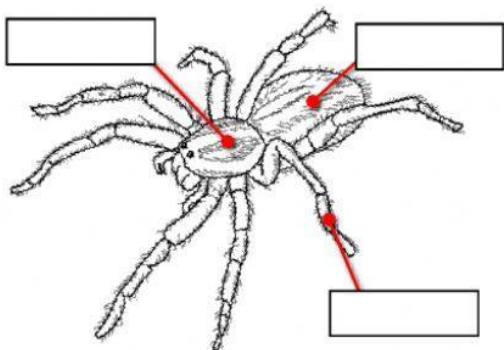
8 legs

Abdomen

Head

Wings

Abdomen




7 Classify these molluscs and arthropods according to their features.



Name:

Shell:



Name:

Shell:



Name:

Shell:



Name:

Legs:



Name:

Legs:



Name:

Legs:



Name:

Legs: