





$$6 + 8 = ?$$







*Agora que já resolveu
as adições no caderno,
vamos completar nosso
álbum de figurinhas.*

Arraste cada figurinha
ao local onde se encontra o
seu resultado.



$$19 + 84$$



$$176 + 3476$$

$$19 + 368$$

$$19 + 829$$

$$19 + 3476$$

$$176 + 84$$

$$176 + 368$$

$$176 + 829$$



$$987 + 84$$



$$1508 + 3476$$

$$987 + 368$$

$$987 + 829$$

$$987 + 3476$$

$$1508 + 84$$

$$1508 + 368$$

$$1508 + 2337$$