






Pineapple stall: Reading a Pictograph

Betty sells pineapples at a fruit stall on weekdays. Look at her sales record below and answer the questions.

Day of the Week	Number of Pineapples sold
Monday	
Tuesday	
Wednesday	
Thursday	
Friday	



1. How many pineapples did Betty sell on Monday? _____
2. On which two days did she sell the same number of pineapples? Choose the earlier day first.
_____ and _____
3. On which day did she sell the least number of pineapples? _____
4. On which day did she sell three pineapples? _____
5. On which day did she sell the most pineapples? _____
6. How many pineapples did she sell over the 5 days? _____

