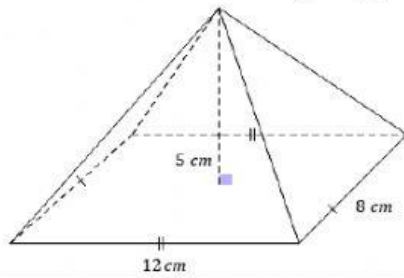


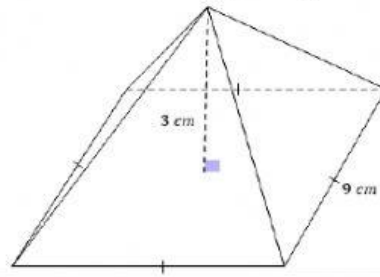
## Volume - Pyramids

Find the volume of the rectangular pyramid



$$V = \frac{1}{3}Bh \quad B = \underline{\hspace{2cm}}$$

Find the volume of the square pyramid



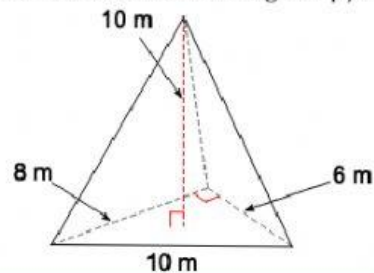
$$V = \frac{1}{3}Bh \quad B = \underline{\hspace{2cm}}$$

Pictured here is the Great Pyramid. It has a square base of side length 230 meter and a vertical height of 146 meters. Find the volume



$$V = \frac{1}{3}Bh \quad B = \underline{\hspace{2cm}}$$

Find the volume of the triangular pyramid



$$V = \frac{1}{3}Bh \quad B = \underline{\hspace{2cm}}$$