





1 .Запиши в празното квадратче, колко са звездите .



1



2 .Свържи картите с числата



2

3

4

5

6



3 .Попълни липсващите числа



1	2		4	5
---	---	---	---	---


2	3	4		6
---	---	---	---	---



5	6	7		9
---	---	---	---	---

4 .Запиши в празното квадратче ,колко са фигурите


	 <input type="text" value="9"/>
---	--

	 <input type="text"/>
---	--

	 <input type="text"/>
---	--

	 <input type="text"/>
---	--

5.



3 > 2



3 < 5



6 < 7



6 < 8



8 = 8

6. Запиши липсващите числа

2 4 5 6 8

7. Попълни пропуснатото число в числовата редица!

1 2 3 4 5 6 7 9 10

1 2 4 5 6 8 9

1 2 3 4 5 7 8



8. Колко са звездичките ?



$1 + 1 =$



$1 + 2 =$



$2 + 2 =$

$3 + 1 =$




									
4					+	1	=	<input type="text"/> 	

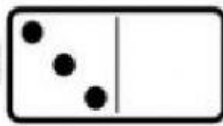


									
3			+	2		=	<input type="text"/> 		




											
5					+	3			=	<input type="text"/> 	




											
2		+	8						=	<input type="text"/> 	

9. Колко общо са точките ?

				<input type="text"/> 	
5	+	1	=	<input type="text"/>	

				<input type="text"/> 	
3	+	0	=	<input type="text"/>	

						<input type="text"/> 		
5	+	4	=	<input type="text"/>				

								<input type="text"/> 			
6	+	4	=	<input type="text"/>							

$$3 + 3 = \square$$

$$6 + 2 = \square$$

$$4 + 3 = \square$$

$$0 + 5 = \square$$

10. Колко общо са точките от двете зарчета ?

		→		<input type="text"/>
		→		<input type="text"/>
		→		<input type="text"/>
		→		<input type="text"/>
		→		<input type="text"/>
		→		<input type="text"/>