


Placement Test

1. Mikio drove 58 miles on Saturday. On Sunday he drove 23 miles. How many miles did he drive on Saturday and Sunday?

2.

Does the ten frame show an even number? Choose Yes or No.



☐ Yes

☐ No




☐ Yes

☐ No

3.

What is the value of the digit 5 in the number 75?



Tens

Ones

4.

THINK SMARTER

Lily has 6 toys cars.
Yong has 5 toy cars. How many
toy cars do they have? (2.OA.B.2)

_____ toy cars

5.

Robin has 180 stickers. How many pages of
10 stickers does she need so that she will
have 200 stickers in all?

_____ pages of stickers

6.

Write the sum. (2.NBT.B.5)

$$\begin{array}{r} 28 \\ + 57 \\ \hline \end{array}$$

$$\begin{array}{r} 67 \\ + 31 \\ \hline \end{array}$$

$$\begin{array}{r} 71 \\ + 19 \\ \hline \end{array}$$

7.

Write the difference. (2.NBT.B.5)

$$\begin{array}{r} 78 \\ - 43 \\ \hline \end{array}$$

$$\begin{array}{r} 60 \\ - 26 \\ \hline \end{array}$$

$$\begin{array}{r} 85 \\ - 37 \\ \hline \end{array}$$

8.

THINK SMARTER

Marissa had 51 toy dinosaurs.
She gave 14 toy dinosaurs to her brother.
How many toy dinosaurs does she have now? (2.NBT.B.5)



<hr/> Dinosaurs.

9.

Write the sum. (2.NBT.B.7)

$$\begin{array}{r} 248 \\ + 346 \\ \hline \end{array}$$

$$\begin{array}{r} 637 \\ + 264 \\ \hline \end{array}$$

$$\begin{array}{r} 391 \\ + 537 \\ \hline \end{array}$$


10.

Mr. Kent had 948 craft sticks. His art class used 356 craft sticks. How many craft sticks does Mr. Kent have now?

_____ craft sticks

11.

Use the picture graph to answer the questions. (2.MD.D.10)



Key: Each  stands for 1 child.

1. Which season did the fewest children choose?

2. How many more children chose spring than fall?

_____ more children

3. How many children chose a season that was not winter?

_____ children

12. Circle the objects that match the shape.

