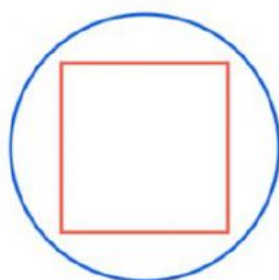


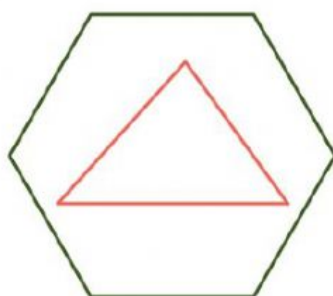
Shapes and space

Look at the pictures and complete the sentences

1. THE _____ IS INSIDE THE _____, AND IT HAS
_____ SIDES AND _____ ANGLES.



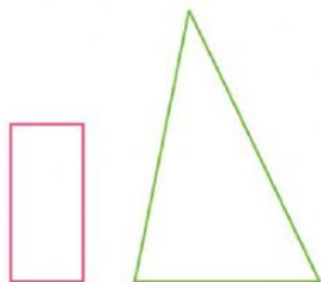
2. THE _____ OUTSIDE _____, AND ITS PERIMETER
HAS _____ SIDES.



3. THE _____ IS ON THE LEFT, THE _____ IS ON _____.



4. THE _____ IS SMALLER THAN _____.



5. THE _____ IS AS HIGH AS _____.



6. THE _____ IS ABOVE THE _____.

THE _____ IS BELOW THE _____.

THE _____ IS TALLER THAN _____.

FROM THE PERSPECTIVE OF THE VIEWER, THE _____ IS ON THE _____, AND THE _____ IS ON THE _____.

