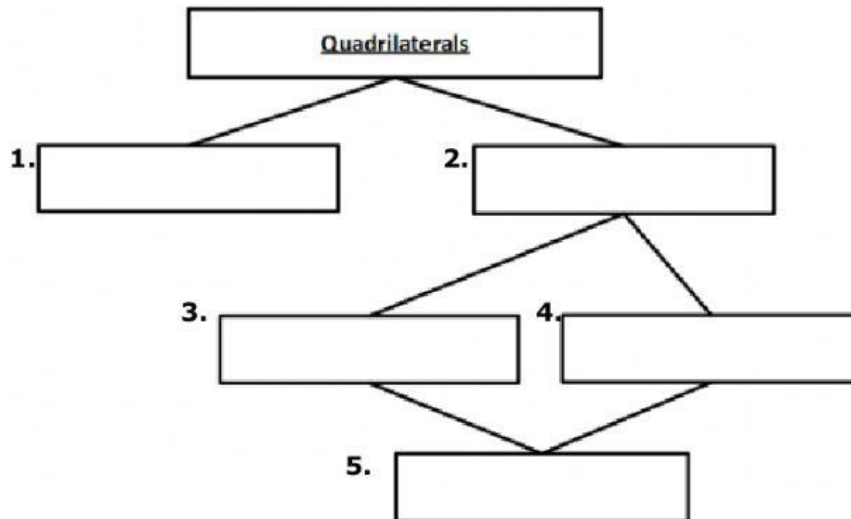


QUADRILATERALS

HOMEWORK
4/1/2021

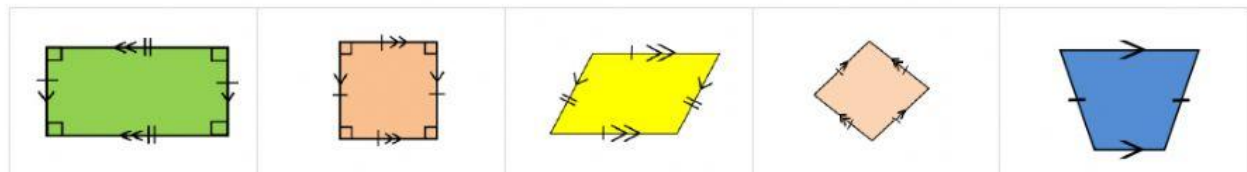
1-5. Complete the quadrilateral tree (use your Venn Diagram & note pg 88)



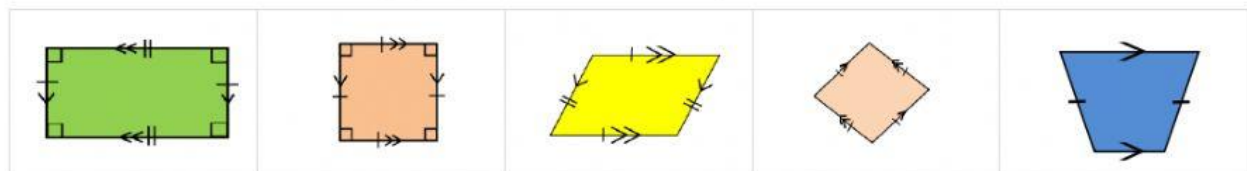
Square	Trapezoid	Rhombus	Parallelogram	Rectangle
--------	-----------	---------	---------------	-----------

DIRECTIONS: Select all the answers that are correct. Use your tree from above to help select all your answers.

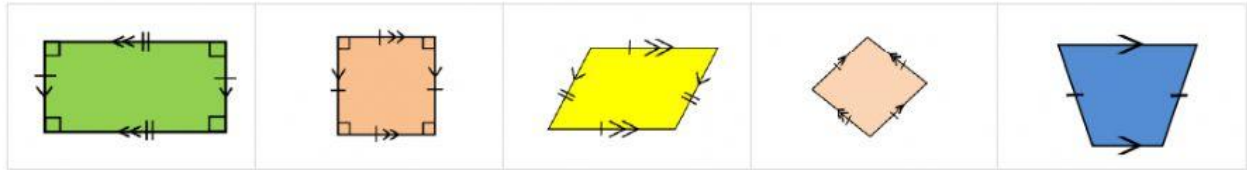
6. Which of the following quadrilaterals are rectangle? Select two.



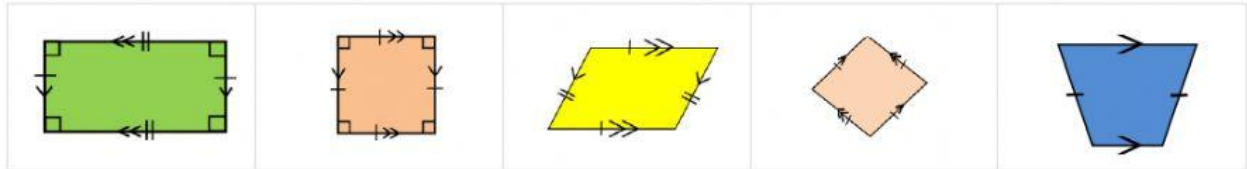
7. Which of the following quadrilaterals are squares? Select one.



8. Which of the following quadrilaterals are trapezoids? Select one.



9. Which of the following quadrilaterals are parallelograms? Select four.



10. Which of the following quadrilaterals are a rhombus? Select two.

