

Beaconhouse School System  
Wapda Town Campus, Gujranwala  
Academic Session: 2020 - 2021

Subject: Mathematical Development





Topic: Data handling

Name: \_\_\_\_\_ Class/Section: Nursery \_\_\_\_\_ Date: \_\_\_\_\_

Count and write number in the boxes below



Count and write number according to picture

Which bug is most in number?

Which bug is least in number?