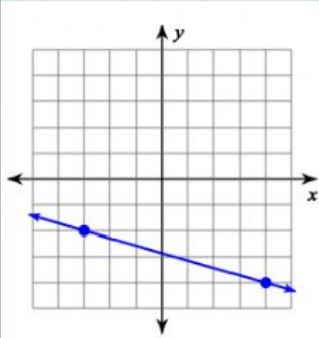
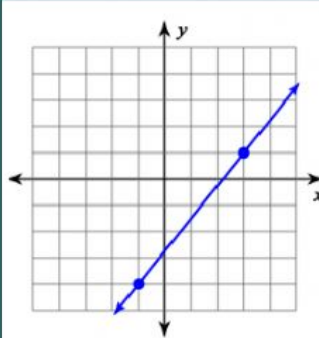


Finding Slope From A Graph Practice

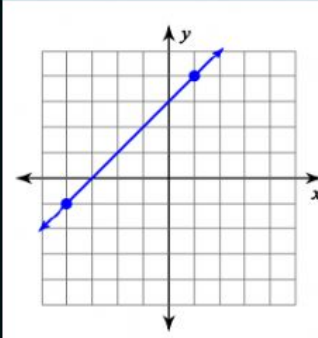
Find the slope of each graph



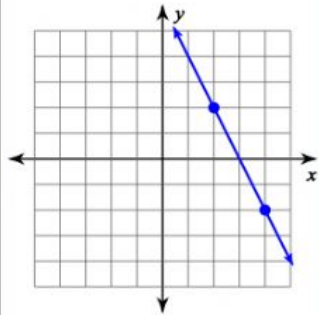
$$m = \frac{\quad}{\quad} =$$



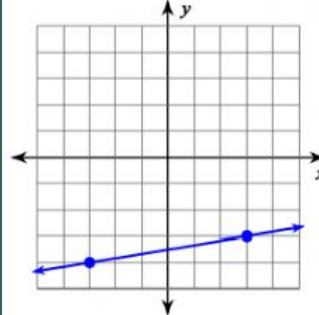
$$m = \frac{\quad}{\quad} =$$



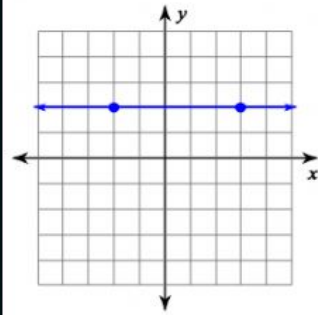
$$m = \frac{\quad}{\quad} =$$



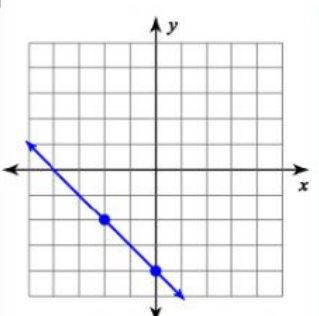
$$m = \frac{\quad}{\quad} =$$



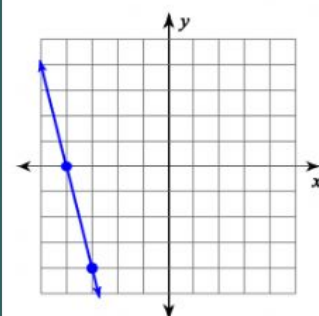
$$m = \frac{\quad}{\quad} =$$



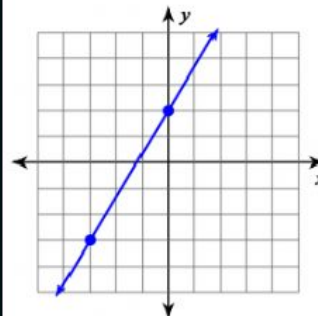
$$m = \frac{\quad}{\quad} =$$



$$m = \frac{\quad}{\quad} =$$



$$m = \frac{\quad}{\quad} =$$



$$m = \frac{\quad}{\quad} =$$