


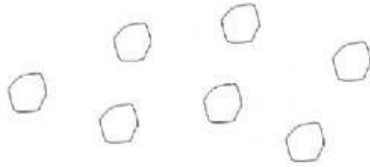

OGNI BICCHIERE CONTIENE 10 CUBETTI DI GHIACCIO (OGNI BICCHIERE E' UNA DECINA): QUANTI CUBETTI SONO SOLI SOLETTI SULLA TAVOLA (LE UNITA')? SCRIVI NELLA TABELLA ALLA TUA DESTRA I NUMERI



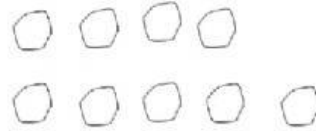

da	u



da	u



da	u



da	u



da	u