

Area & Perimeter

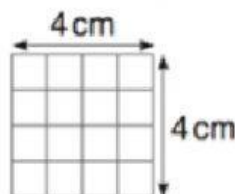
Perimeter: Add all sides of a shape.

$$P = (L + W) \times 2$$

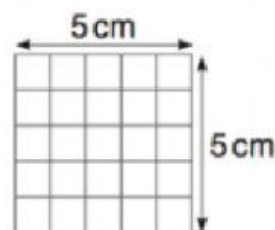
Area: Multiply both sides

$$A = L \times W$$

1



cm²



cm²

2 Find the area and perimeter of rectangles with these dimensions:

a 8cm by 4cm

Area = Cm² Perimeter = Cm

b 9cm by 7cm

Area = Cm² Perimeter = Cm

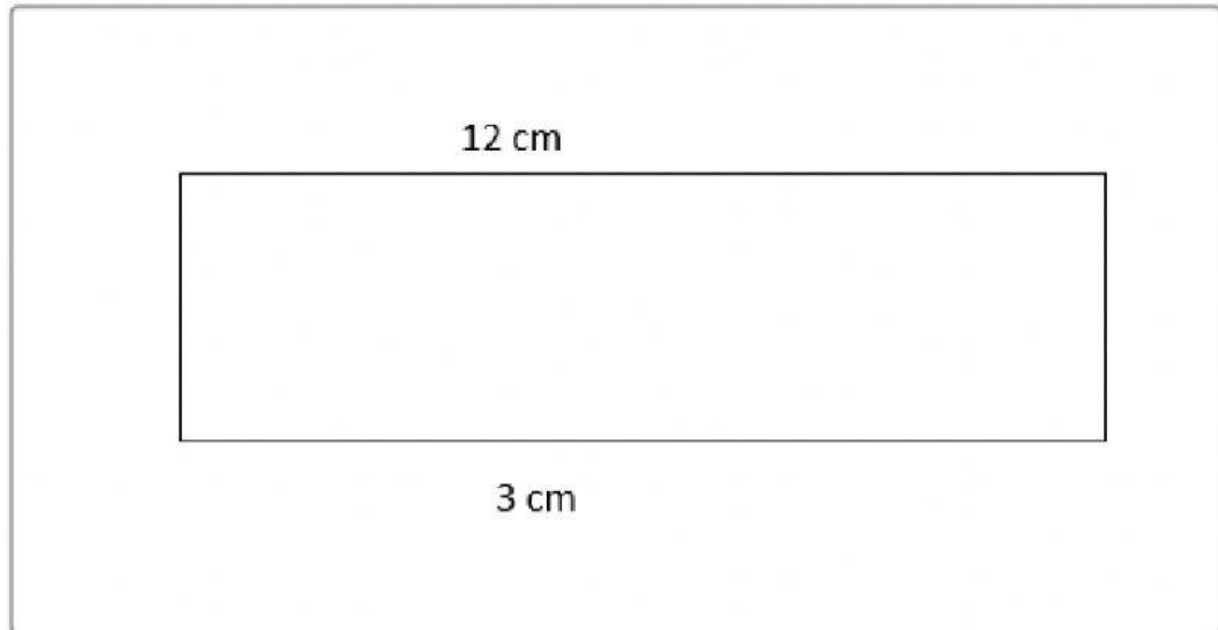
c 5cm by 6cm

Area = Cm² Perimeter = Cm

d 12cm by 3cm

Area = Cm² Perimeter = Cm

Sasha drew a rectangle. It measured 12 cm by 3 cm.



- a** What is the area of Sasha's rectangle? Cm^2
- b** What is the perimeter of Sasha's rectangle? Cm