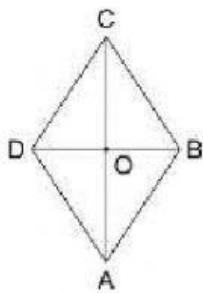
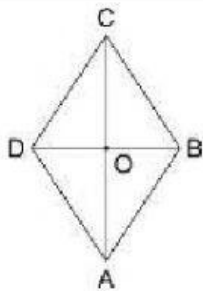


## AREA E PERIMETRO DEL ROMBO



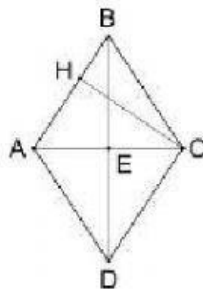
AC = 80 cm  
BD = 60 cm

A = ..... cm<sup>2</sup>



AB = 12 cm

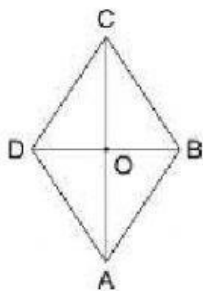
P = ..... cm



AB = 30 cm  
CH = 40 cm

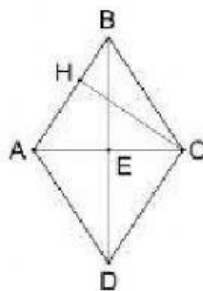
A = ..... cm<sup>2</sup>

P = ..... cm



A = 39 cm<sup>2</sup>  
DB = 6 cm

AC = ..... cm



A = 48 cm<sup>2</sup>  
CH = 6 cm

AB = ..... cm

P = ..... cm