


SCIENCE EXERCISES 2

Bismillaahirrohmaanirrohiim

1. Give tick (V) to the things that use battery or electricity.



2. Tick (V) what you should not to do when using electricity.








3. There are breads in the toaster.



- a. What does the toaster use electricity for?
- b. Does the toaster use electricity from the mains or batteries?

.....

Match the things to what they do in a circuit.

4		Holds the battery
5		Uses electricity to make sounds
6		Pushes electricity around a circuit
7		Connect the parts of a circuit
8		Uses electricity to give off light

9. Which part of the circuit turns the electricity on or off?

The turns the electricity on or off by closing or opening the circuit.

10. Look at the diagram below.

Give tick (V) in the box for the bulb **that can be light**.



11. Write three ways of using electricity safely.

- a.
- b.
- c.

Alhamdulillahirobbil'alamiin