







Name	
Grade/Section	
Write the ratio of the following item, express your answer in colon form.	

1) 
The ratio of  to  is _____.

2) 
The ratio of  to  is _____.

3) 
The ratio of  to  is _____.

4) 
The ratio of  to  is _____.

5) 
The ratio of  to  is _____.

Are the Ratios Proportional?

Name: _____ Score: _____

Are the following ratios proportional? Answer with 'yes' or 'no'.

5 : 15 and 10 : 30

16 : 4 and 25 : 5

10 : 15 and 20 : 25

20 : 60 and 30 : 90

5 : 10 and 100 : 300

12 : 10 and 24 : 20