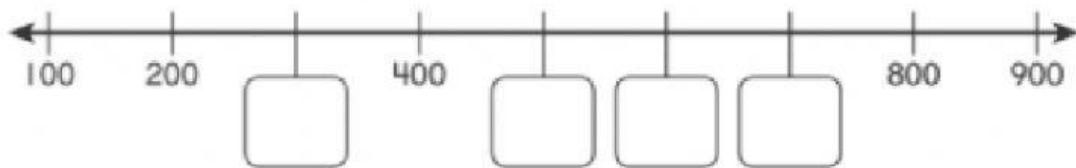
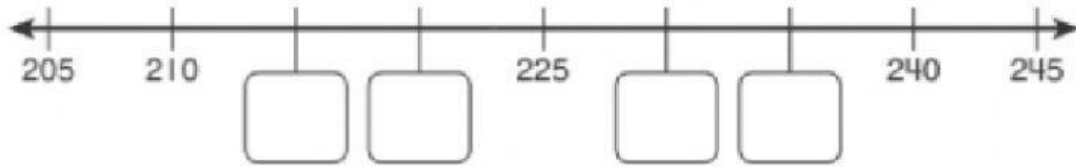


MATH QUIZ – SECOND GRADE


Name: _____

Date: _____

Instruction: Skip count. Write the missing numbers.



Instruction: Start at 125 and stop at 145. Skip count by 5s.



Instruction: Compare. Fill out each circle with $<$, $>$, or $=$

341 432

890 880

546 546

195 196

Instructions: Find two numbers less than and greater than 825. Compare those numbers.

820 $<$ 825 _____ $<$ 825 _____ $>$ 825 _____ $>$ 825

834

850

754