

ST. GILES' PRIMARY SCHOOL
Infants B Excellence End of Term 2
Assessment
Mathematics

Answer as many questions as you can without help from your parents or other adults.

1. Write the numbers for:

- a. three _____
- b. fourteen _____
- c. twenty-seven _____

2. Write the names of:

- a. 5 _____
- b. 12 _____
- c. 39 _____

3. Fill in the blanks

a. 0, 2, 4, _____, _____, 10, 12

b. 45, 46, 47, _____, _____, 50, 51

4. Put the numbers in the correct column.

2 13 24 37 49 58 60
 71 82 95

Odd Numbers	Even Numbers

5. Complete the following.

a. $\underline{\quad\quad} = 0 \text{ tens} + 3 \text{ ones}$

b. $43 = \underline{\quad\quad} \text{ tens} + \underline{\quad\quad} \text{ ones}$

c. $62 = \underline{\quad\quad} \text{ tens} + 2 \text{ ones}$

6. Add

a. Jayden caught 6 fishes. Kemario caught 3 fishes. How many fishes did they catch altogether? $\underline{\quad\quad}$ fishes

b. $7 + 2 + 5 =$

c.

	T	O
	2	1
+	3	4
	<u> </u>	<u> </u>

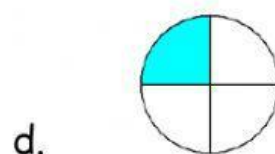

7. Subtract

a. What is the difference between 6 and 2 ?

b. $12 - 8 =$

c.
$$\begin{array}{r} 27 \\ - 13 \\ \hline \end{array}$$

8. What fraction is shaded ? Drag the correct box.




9. Type the time shown on the clocks below.

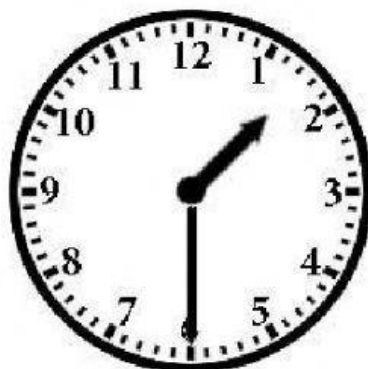
half past

quarter past


o'clock



a.



b.



c.

10. Answer all questions from the calendar below.

MAY 2021						
MONDAY	TUESDAY	WEDNESDAY	THURSDAY	FRIDAY	SATURDAY	SUNDAY
					1	2
3	4	5	6	7	8	9
10	11	12	13	14	15	16
17	18	19	20	21	22	23
24	25	26	27	28	29	30
31						

Print Free Calendar Template from Mondaystartcalendar.com

a. How many days are in the month of May ?

b. There are Thursdays in May.

c. Christina's birthday party is on the 16th of May. Which day of the week is her birthday party on ?